



88146506



PHYSICS
STANDARD LEVEL
PAPER 3

Candidate session number

--	--	--	--	--	--	--	--	--	--

Friday 7 November 2014 (afternoon)

Examination code

1 hour

8	8	1	4	–	6	5	0	6
---	---	---	---	---	---	---	---	---

INSTRUCTIONS TO CANDIDATES

- Write your session number in the boxes above.
- Do not open this examination paper until instructed to do so.
- Answer all of the questions from two of the Options.
- Write your answers in the boxes provided.
- A calculator is required for this paper.
- A clean copy of the *Physics Data Booklet* is required for this paper.
- The maximum mark for this examination paper is [40 marks].

Option	Questions
Option A — Sight and wave phenomena	1 – 4
Option B — Quantum physics and nuclear physics	5 – 7
Option C — Digital technology	8 – 10
Option D — Relativity and particle physics	11 – 13
Option E — Astrophysics	14 – 16
Option F — Communications	17 – 19
Option G — Electromagnetic waves	20 – 22



44EP01

Please **do not** write on this page.

Answers written on this page
will not be marked.



44EP02

Option A — Sight and wave phenomena

1. This question is about the eye and sight.

(a) Compare the functions of the rods and cones in the retina.

[2]

.....
.....
.....
.....

(b) Outline the process of accommodation of the eye.

[2]

.....
.....
.....
.....

(Option A continues on the following page)




44EP03

Turn over

(Option A continued)

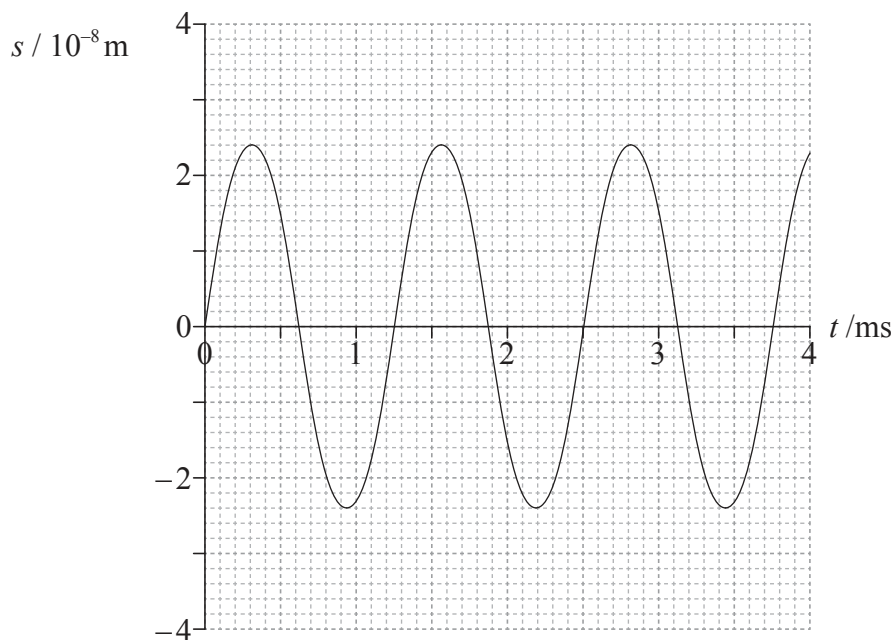
2. This question is about standing (stationary) waves.

The diagram shows a tube that is open at both ends.



Point A shows the position of one air molecule in the tube. A standing sound wave (not shown in the diagram) is set up in the tube.

The graph shows the variation of displacement s with time t for the molecule at point A.



- (a) Outline whether the standing wave is transverse **or** longitudinal. [1]

.....

.....

(Option A continues on the following page)



44EP04

(Option A, question 2 continued)

- (b) The standing wave in the tube corresponds to the fourth harmonic. The speed of sound in the tube is 340 m s^{-1} . Using the graph, determine the length of the tube. [3]

.....
.....
.....
.....
.....
.....

- (c) The tube is now closed at one end and the first harmonic is sounded. Outline why the tube that is open at both ends produces a first harmonic with a wavelength shorter than the first harmonic of the tube that is closed at one end. [1]

.....
.....

(Option A continues on the following page)



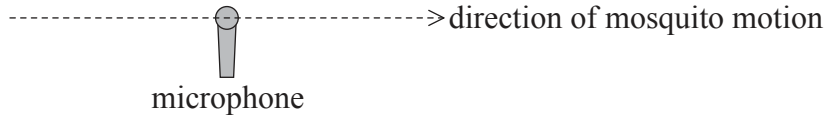
44EP05

Turn over

(Option A continued)

3. This question is about the Doppler effect.

Georgia carries out an experiment to measure the speed of mosquitoes. She sets up a microphone to record the sounds of passing mosquitoes.



One mosquito is moving in a straight line with constant speed and passes very close to the microphone as seen in the diagram. The mosquito produces a sound of constant frequency. The speed of sound in air is 340 m s^{-1} .

(a) The maximum frequency recorded is 751 Hz and the minimum frequency recorded is 749 Hz. Explain this observation. [2]

.....

.....

.....

.....

(b) Determine the speed of the mosquito. [3]

.....

.....

.....

.....

.....

(Option A continues on the following page)



(Option A continued)

4. This question is about polarization.

(a) Distinguish between polarized light and unpolarized light.

[2]

.....

(Option A continues on the following page)

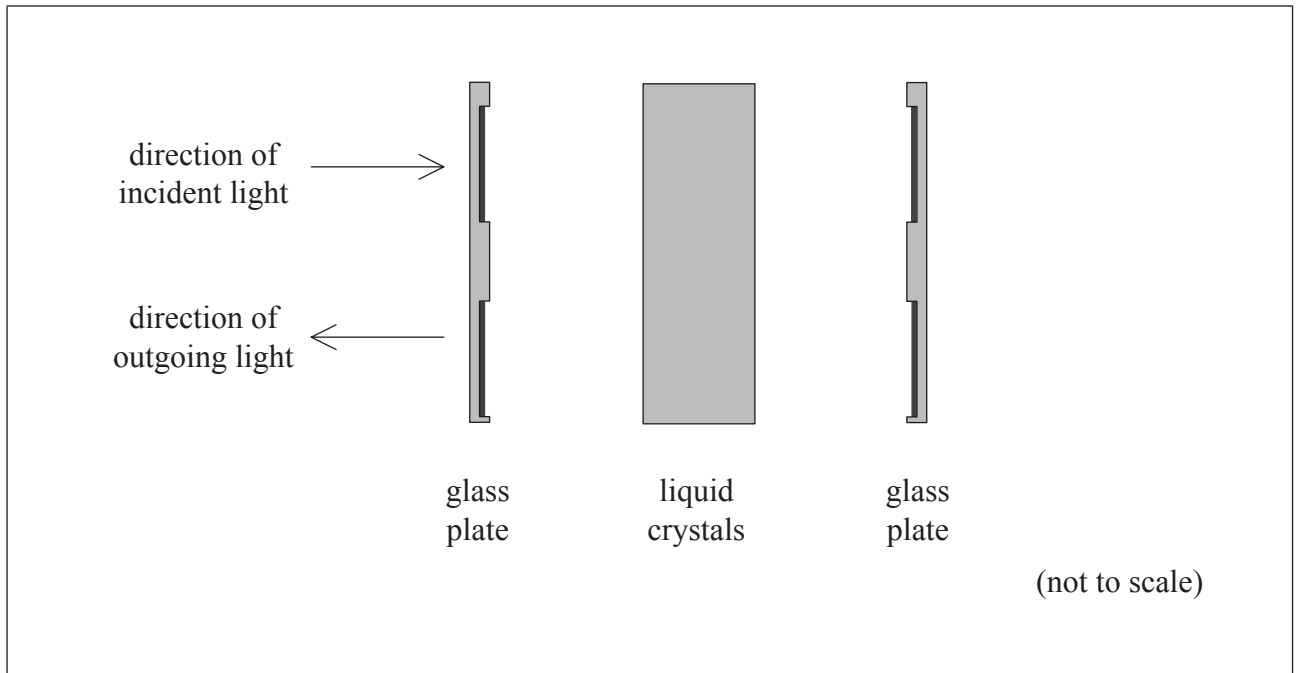


44EP07

Turn over

(Option A, question 4 continued)

- (b) In a liquid-crystal display (LCD), liquid crystals are contained between two glass plates. Electrodes are etched on the glass plates.



The LCD also includes two plane polarizing sheets and a reflecting surface.

- (i) Draw and label the position of the two polarizing sheets and of the reflecting surface. [2]
- (ii) The two sheets are arranged with their polarizing planes at right angles. Unpolarized incident light enters the LCD and after reflection, exits from the same side as shown in the diagram. The light has intensity I_0 when incident on the LCD and intensity I when it exits the LCD.

Determine the ratio $\frac{I}{I_0}$. [2]

.....

.....

.....

.....

End of Option A



44EP08

Please **do not** write on this page.

Answers written on this page
will not be marked.



44EP09

Turn over

Option B — Quantum physics and nuclear physics

5. This question is about the wave nature of matter.

(a) Describe wave-particle duality in relation to the de Broglie hypothesis.

[2]

.....
.....
.....
.....

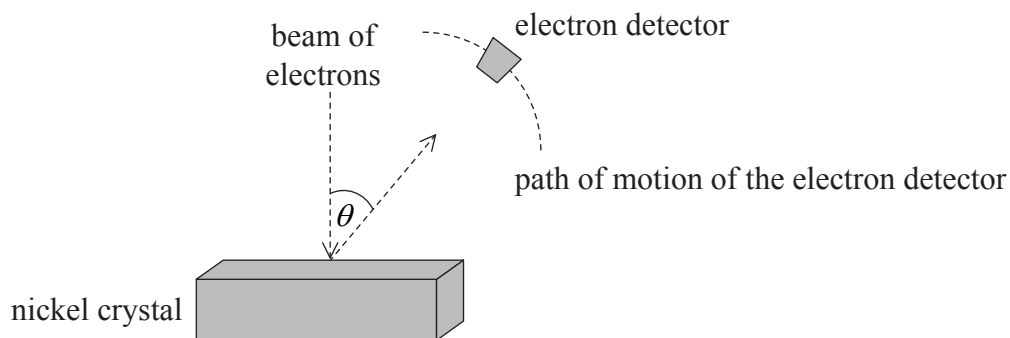
(Option B continues on the following page)



44EP10

(Option B, question 5 continued)

- (b) In 1927 Davisson and Germer tested the de Broglie hypothesis. They directed a beam of electrons onto a nickel crystal as shown in the diagram. The experiment was carried out in a vacuum.



- (i) The electrons were accelerated through a potential difference of 54 V. Show that the associated de Broglie wavelength for the electrons is about 2×10^{-10} m. [2]

.....
.....
.....
.....

- (ii) The electron detector recorded a large number of electrons at a particular scattering angle θ . Explain why a maximum in the number of scattered electrons is observed at a particular angle. [2]

.....
.....
.....
.....

(Option B continues on the following page)



44EP11

Turn over

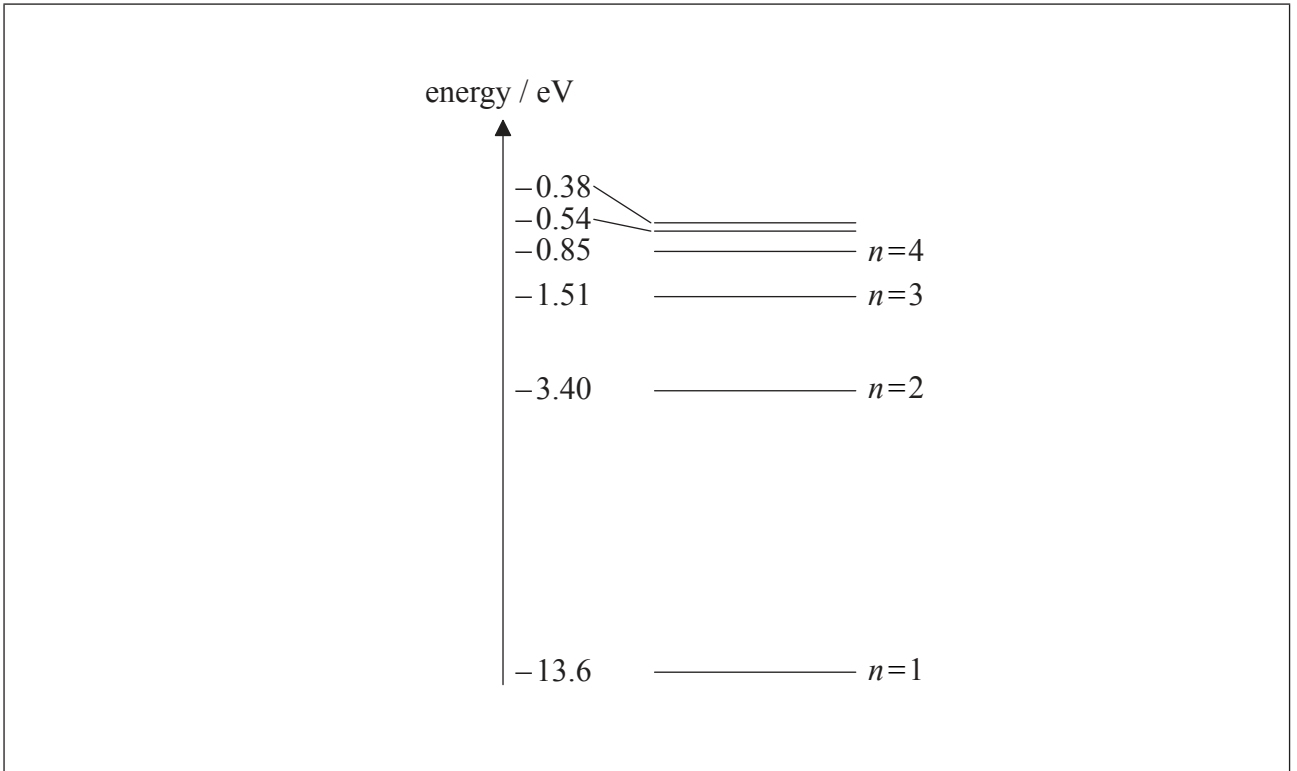
(Option B continued)

6. This question is about atomic spectra and energy states.

(a) Outline how atomic absorption spectra provide evidence for the quantization of energy states in atoms. [2]

.....
.....
.....
.....

(b) The diagram shows some atomic energy levels of hydrogen.



A photon of energy 2.86 eV is emitted from a hydrogen atom. Using the diagram, draw an arrow to indicate the electron transitions that results in the emission of this photon. [1]

(Option B continues on the following page)



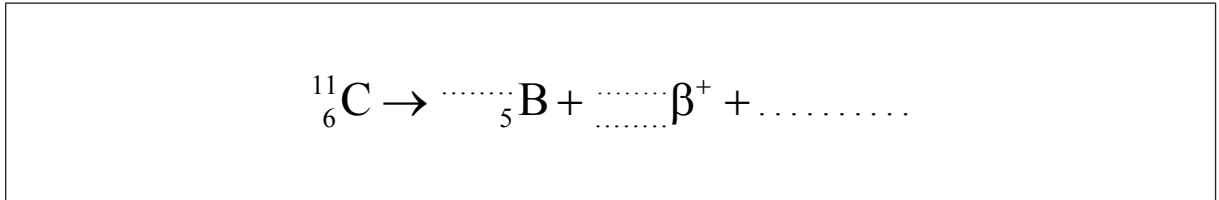
44EP12

(Option B continued)

7. This question is about radioactive decay.

In a particular nuclear medical imaging technique, carbon-11 ($^{11}_6\text{C}$) is used. It is radioactive and decays through β^+ decay to boron (B).

(a) (i) Identify the numbers and the particle to complete the decay equation. [2]



(ii) State the nature of the β^+ particle. [1]

.....
.....

(Option B continues on the following page)



(Option B, question 7 continued)

(b) The half-life of carbon-11 is 20.3 minutes.

(i) Outline a method for measuring the half-life of an isotope, such as the half-life of carbon-11. [3]

.....

.....

.....

.....

(ii) State the law of radioactive decay. [1]

.....

.....

(iii) Derive the relationship between the half-life $T_{\frac{1}{2}}$ and the decay constant λ , using the law of radioactive decay. [2]

.....

.....

.....

.....

(Option B continues on the following page)



(Option B, question 7 continued)

- (iv) Calculate the number of nuclei of carbon-11 that will produce an activity of 4.2×10^{20} Bq. [2]

.....

End of Option B



44EP15

Turn over

Option C — Digital technology

8. This question is about analogue and digital storage of information.

Information can be stored on a DVD or a cassette tape.

(a) (i) State **one** advantage of the storage of information in digital form compared to analogue form. [1]

.....

.....

(ii) Distinguish between how information is stored on a cassette tape and how information is stored on a DVD. [2]

.....

.....

.....

.....

(Option C continues on the following page)



(Option C, question 8 continued)

- (b) An audio DVD has a storage capacity of 4.38 gigabytes (1 byte = 8 bits). Information is stored on the DVD with a sampling frequency of 192 kHz. Each sample consists of two 24-bit samples. The depth of each pit is 120 nm.

Use the data to

- (i) explain why a wavelength of light of 480 nm is used to read the DVD. [2]

.....

.....

.....

.....

- (ii) calculate the running time of the DVD. [2]

.....

.....

.....

.....

(Option C continues on the following page)



44EP17

Turn over

(Option C continued)

9. This question is about digital imaging using charge-coupled devices (CCDs).

A digital image of a small insect is captured. Two spots on the insect are 1.5×10^{-4} m apart. The area of the CCD is 864 mm^2 . There are 13.7×10^6 pixels on the CCD. The magnification of the CCD is 0.14.

(a) Define *magnification*. [1]

.....
.....

(b) (i) Calculate the distance between the two spots on the image of the insect. [2]

.....
.....
.....
.....

(ii) Determine if the two spots in (b)(i) can be resolved. [3]

.....
.....
.....
.....
.....
.....

(Option C continues on the following page)



(Option C, question 9 continued)

(c) Outline the information that must be retrieved from a pixel.

[2]

.....
.....
.....
.....

(Option C continues on the following page)



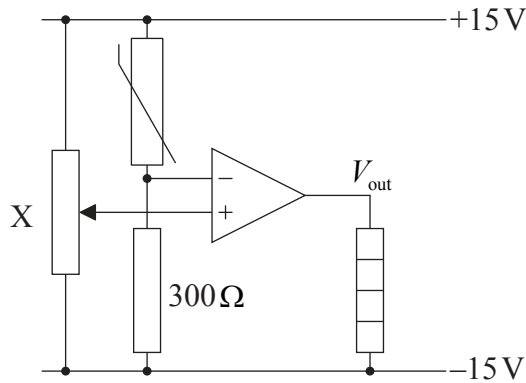
44EP19

Turn over

(Option C continued)

10. This question is about an operational amplifier (op-amp).

An op-amp is used as a comparator in a circuit, as shown.



The circuit is used to monitor the temperature in a greenhouse. The resistance of a thermistor decreases as its temperature increases.

(a) Explain how the potential at the inverting input changes as the temperature decreases. [2]

.....
.....
.....
.....

(b) Describe the purpose of component X in the circuit. [1]

.....
.....

(Option C continues on the following page)



(Option C, question 10 continued)

When the potential of the non-inverting input is set at 0V, the heater switches on at a temperature of around 10°C. The ideal temperature to grow plants in the greenhouse is 18°C or greater. At 18°C the resistance of the thermistor is 193 Ω.

- (c) Show that the potential at the non-inverting input should be set to around 3 V to ensure the heating element turns on when the temperature is less than 18°C. [2]

.....

.....

.....

.....

End of Option C



44EP21

Turn over

Please **do not** write on this page.

Answers written on this page
will not be marked.

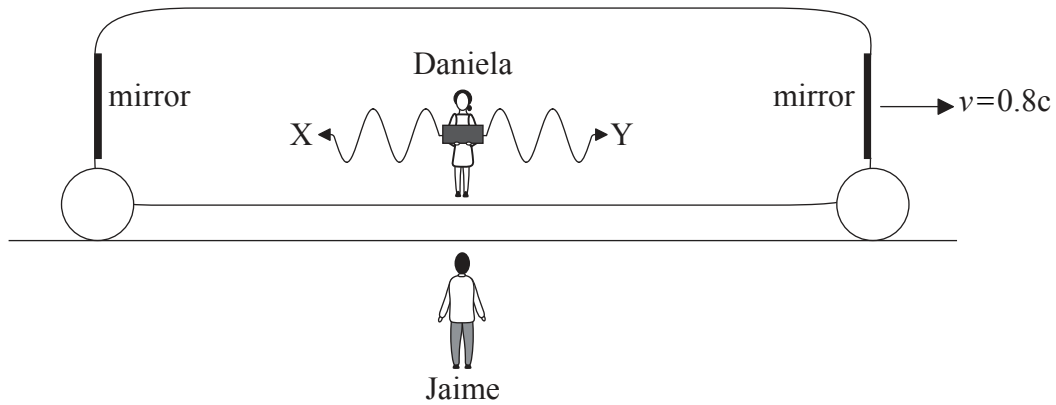


44EP22

Option D — Relativity and particle physics

11. This question is about simultaneity.

Daniela is standing in the middle of a train that is moving at a constant velocity relative to Jaime, who is standing on the platform. At the moment the train passes Jaime, two beams of light, X and Y, are emitted simultaneously from a device held by Daniela. Both beams are reflected by mirrors at the end of the train and then return to Daniela.



(a) State and explain the order of arrival of X and Y at the mirrors according to Jaime. [3]

.....

.....

.....

.....

.....

.....

(b) Outline whether the return of X and Y to Daniela are simultaneous according to Jaime. [2]

.....

.....

.....

.....

(Option D continues on the following page)



44EP23

Turn over

(Option D continued)

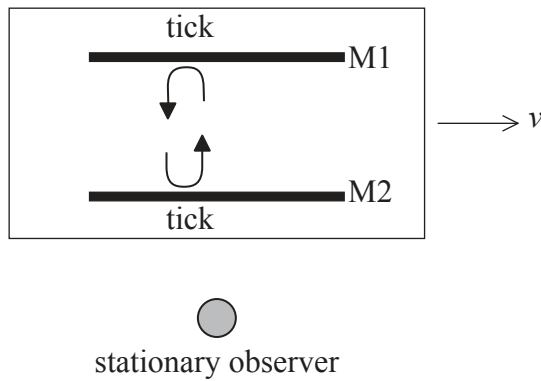
12. This question is about a light clock.

- (a) One of the postulates of special relativity refers to the speed of light. State the other postulate of special relativity. [1]

.....

.....

- (b) In a light clock, a beam of light is reflected between two parallel mirrors M1 and M2.



The time interval between successive reflections at M2 according to an observer **at rest relative to the light clock** is t . This light clock is moving at velocity v relative to the stationary observer.

- (i) Show that the time t' between successive reflections at M2 in this light clock as measured by the stationary observer is $t' = \frac{1}{\sqrt{1 - \frac{v^2}{c^2}}} t$. [3]

.....

.....

.....

.....

.....

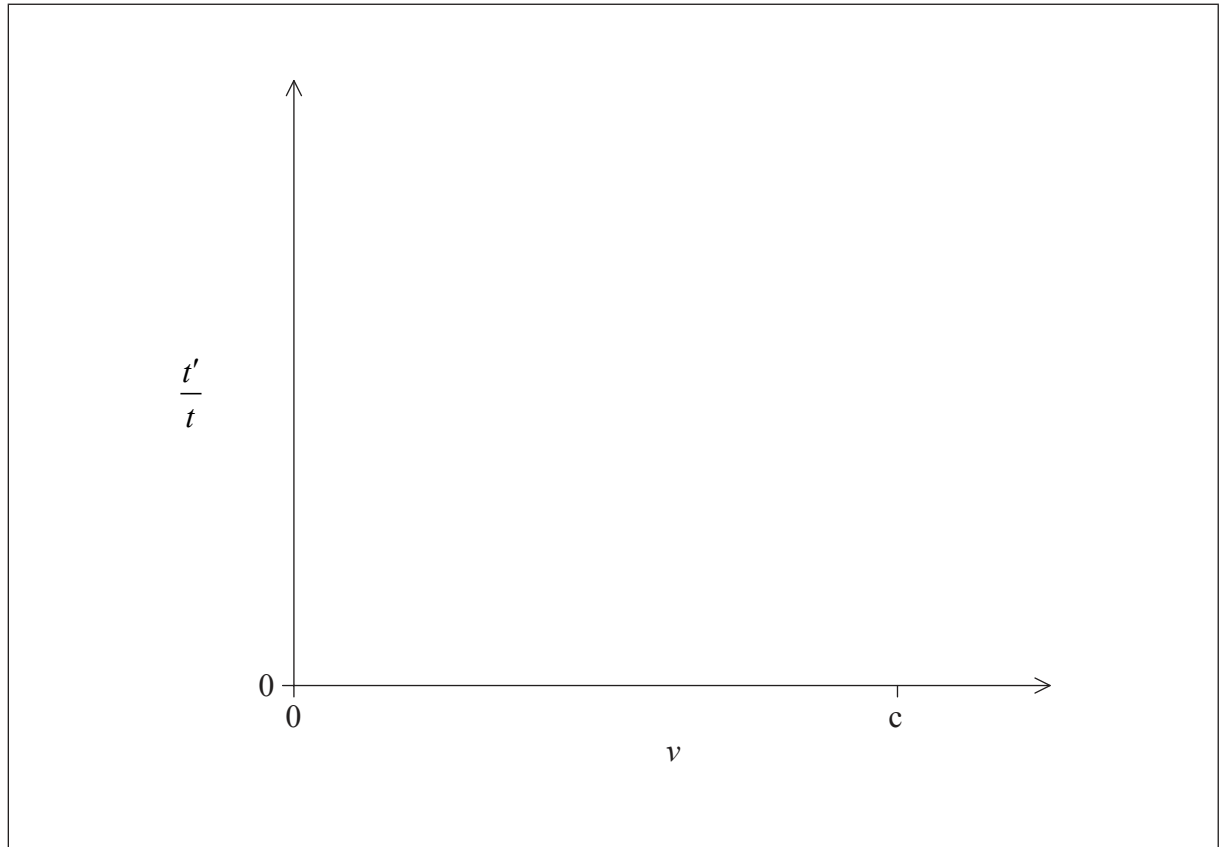
.....

(Option D continues on the following page)



(Option D, question 12 continued)

- (ii) Using the axis, sketch a graph to show how the ratio $\frac{t'}{t}$ varies with v . You should add key values to your graph. [2]



(Option D continues on the following page)



44EP25

Turn over

(Option D continued)

13. This question is about fundamental interactions and elementary particles.

- (a) (i) Identify the type of fundamental interactions associated with the exchange particles in the table. [2]

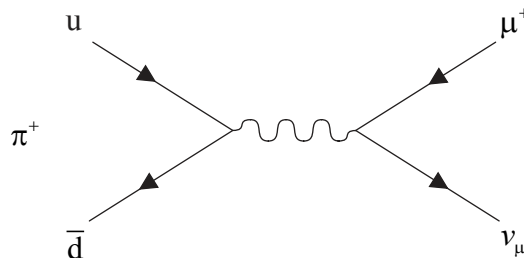
Exchange particle	Fundamental interaction
Photon	
Pi meson, π^+	

- (ii) State why π^+ mesons are **not** considered to be elementary particles. [1]

.....

.....

- (b) The Feynman diagram represents the decay of a π^+ meson into an anti-muon and a muon neutrino.



- (i) Identify the exchange particle associated with this decay. [1]

.....

(Option D continues on the following page)



44EP26

(Option D, question 13 continued)

- (ii) Deduce that this decay conserves baryon number. [2]

.....
.....
.....
.....

- (iii) π^+ mesons have a mass of the order of magnitude of around 100 MeV c^{-2} . Show that the range of interactions of π^+ mesons is around 10^{-15} m . [2]

.....
.....
.....
.....

- (iv) Describe why π^+ mesons are thought to be responsible for the strong nuclear force. [1]

.....
.....
.....
.....

End of Option D



44EP27

Turn over

Option E — Astrophysics

14. This question is about the night sky.

(a) Distinguish between a stellar cluster and a constellation.

[2]

.....
.....
.....
.....

(b) Describe the apparent motion of stars in the sky over a period of 24 hours.

[1]

.....
.....

(Option E continues on the following page)



(Option E continued)

15. This question is about stellar radiation and stellar types.

Alnilam and Bellatrix are two stars in the constellation of Orion. The table gives information on each of these stars. L_{\odot} is the luminosity of the Sun and R_{\odot} is the radius of the Sun.

	Apparent magnitude	Absolute magnitude	Surface temperature	Luminosity	Radius
Alnilam	+1.68	-6.37	27 000 K	$275\,000L_{\odot}$	$24R_{\odot}$
Bellatrix	+1.62	-2.37	T_B	$6400L_{\odot}$	$6R_{\odot}$

(a) (i) Explain how Alnilam has a similar apparent magnitude to Bellatrix but a smaller absolute magnitude. [2]

.....

.....

.....

.....

(ii) Calculate the surface temperature T_B of the star Bellatrix. [3]

.....

.....

.....

.....

.....

.....

(Option E continues on the following page)



(Option E, question 15 continued)

(b) Using a telescope based on Earth, an observer estimates the distance to Alnilam using the stellar parallax method.

(i) Describe the stellar parallax method.

[2]

.....

.....

.....

.....

(ii) Determine whether the stellar parallax method can be used to estimate the distance of Alnilam from Earth.

[3]

.....

.....

.....

.....

.....

(Option E continues on the following page)



44EP30

(Option E continued)

16. This question is about cosmology.

Newton assumed that the universe was infinite, uniform and static. The Big Bang model suggests space and time originated at one point around 14 billion years ago. At this time the temperature was very high.

(a) Olbers suggested that if Newton was correct then the sky should never be dark. Explain Olbers' paradox quantitatively. [3]

.....
.....
.....
.....
.....
.....

(b) In 1965, Penzias and Wilson discovered cosmic radiation with a wavelength that corresponded to a temperature of around 3K. Outline how cosmic radiation in the microwave region is consistent with the Big Bang model. [2]

.....
.....
.....
.....

(c) Suggest how the Big Bang model provides a resolution to Olbers' paradox. [2]

.....
.....
.....
.....

End of Option E



44EP31

Turn over

Option F — Communications

17. This question is about radio communication.

A signal wave can modulate a carrier wave using either amplitude modulation (AM) or frequency modulation (FM).

(a) (i) Distinguish between amplitude modulation and frequency modulation. [2]

.....
.....
.....
.....

(ii) State why carrier waves are modulated. [1]

.....
.....

(iii) Sketch the waveform that results when a signal wave modulates a carrier wave of higher frequency. Include at least **one** cycle of the amplitude modulation. [2]

(Option F continues on the following page)



44EP32

(Option F, question 17 continued)

- (b) Identify **one** advantage and **one** disadvantage of AM radio communication compared to FM radio communication. [2]

<p>Advantage:</p> <p>.....</p> <p>.....</p> <p>Disadvantage:</p> <p>.....</p> <p>.....</p>

(Option F continues on the following page)



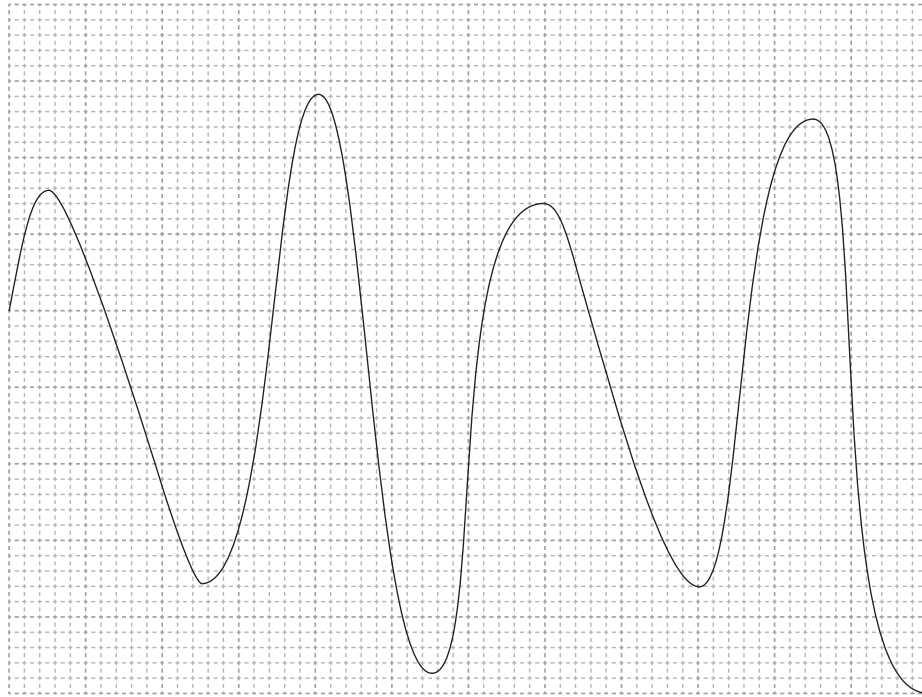
44EP33

Turn over

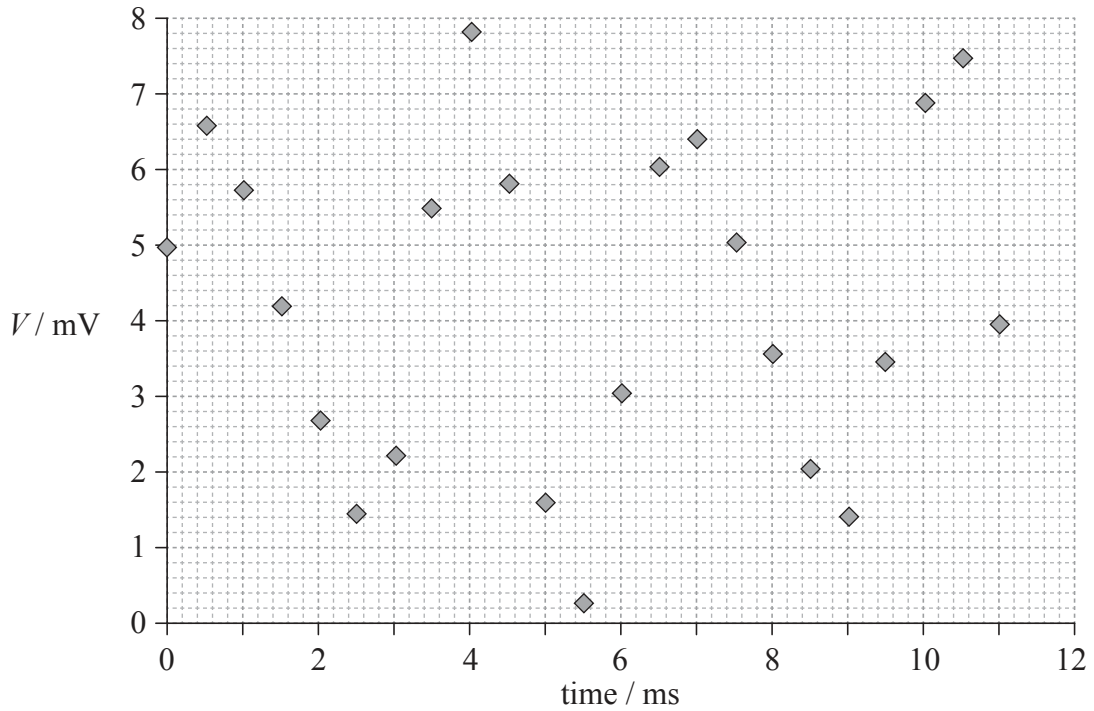
(Option F continued)

18. This question is about digital signals.

Graph 1 shows the original waveform of a sound wave.



Graph 2 shows the voltage of this wave at the sampling points.



(Option F continues on the following page)



44EP34

(Option F, question 18 continued)

The input signal is converted into a 4-bit binary signal, according to the following rule.

Input signal / mV	4-bit binary conversion
$0 \leq V < 0.5$	0000
$0.5 \leq V < 1.0$	0001
$1.0 \leq V < 1.5$	0010
$1.5 \leq V < 2.0$	0011
\vdots	\vdots
$7.5 \leq V < 8.0$	1111

(a) Calculate the sampling frequency. [1]

.....

.....

(b) Determine the 4-bit binary signal when $t = 4.5$ ms. [1]

.....

.....

(c) State and explain **one** change to this system which will allow the output signal that was reconstructed from the binary signal to match the original analogue signal more closely. [2]

.....

.....

.....

.....

(Option F continues on the following page)



44EP35

Turn over

(Option F continued)

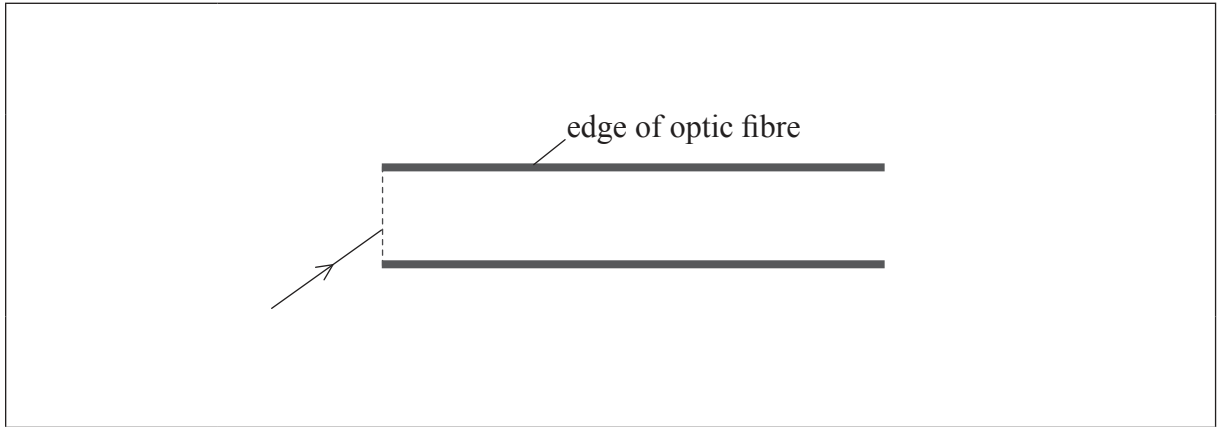
19. This question is about optic fibres.

An optic fibre consists of a thin glass fibre surrounded by a cladding material. The refractive index of the glass is 1.62.

(a) (i) Calculate the critical angle for this optic fibre. [1]

.....
.....

(ii) The diagram shows a straight optic fibre. Sketch the passage of a ray of light through the fibre. [2]



(b) The input power to the fibre is 150 mW. The attenuation per unit length of the glass fibre is 12.0 dB km⁻¹. When the light has travelled a distance l its power has fallen to 3.00 mW, at which point amplification of the signal is required. Determine l . [2]

.....
.....
.....
.....

(Option F continues on the following page)



44EP36

(Option F, question 19 continued)

- (c) The variation with time t of the input power to an optic fibre of length l is shown in diagram 1. The variation with time t of the output power from the optic fibre is shown in diagram 2. The output power on diagram 2 is not to the same scale as the input power on diagram 1.

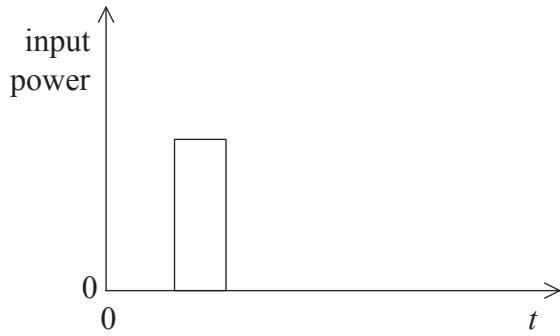


Diagram 1

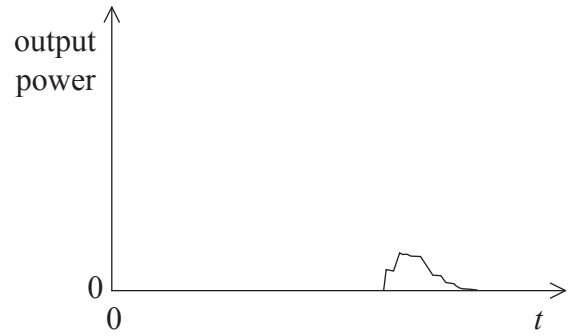


Diagram 2

The output power is much smaller than the input power because energy is absorbed as the light passes along the optic fibre.

- (i) One difference between the shape of the input and output signals is that the output signal is noisier than the input signal. State and explain **one** other difference between the shape of the input signal and the output signal. [2]

.....
.....
.....
.....

- (ii) Describe how the output signal can be restored to its original shape. [2]

.....
.....
.....
.....

End of Option F



44EP37

Turn over

Please **do not** write on this page.

Answers written on this page
will not be marked.



44EP38

Option G — Electromagnetic waves

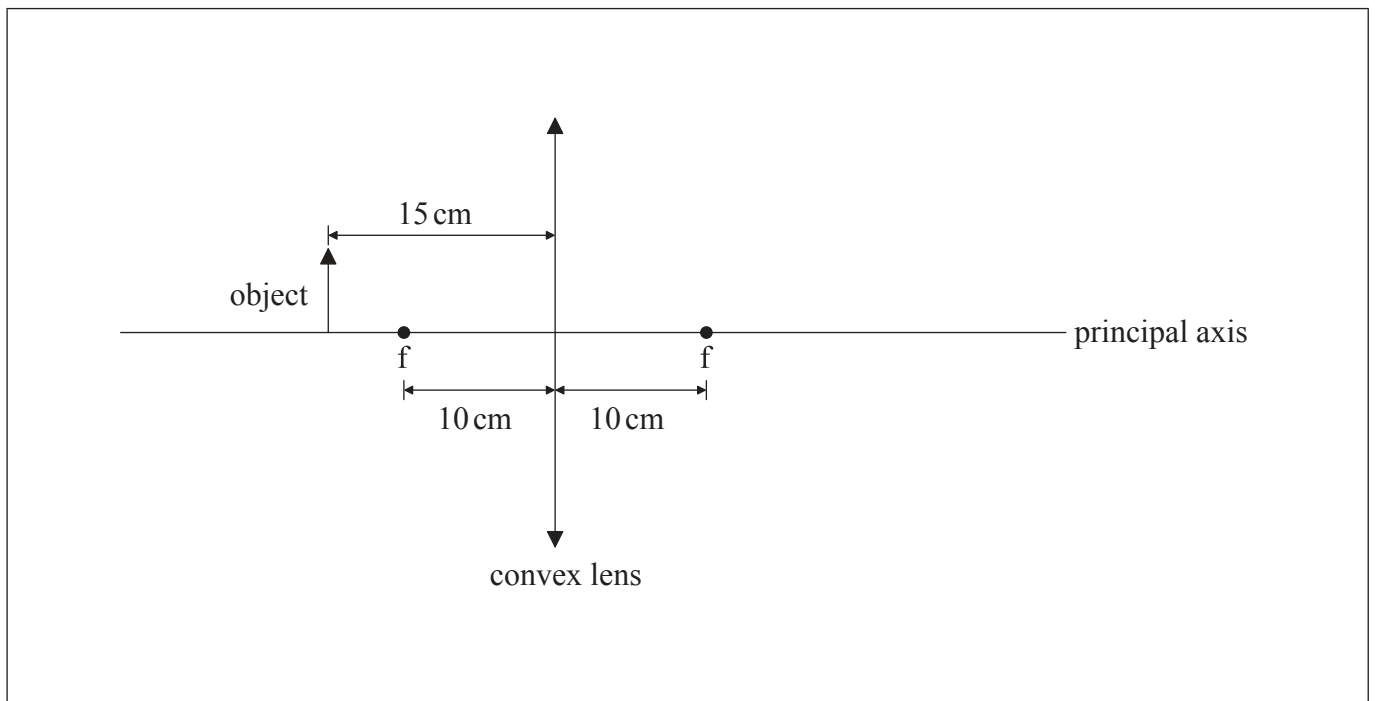
20. This question is about convex lenses.

(a) A convex (converging) lens is used to project an image onto a screen. The focal length of the lens is 10 cm. The object is placed at a distance of 15 cm from the centre of the lens on the principal axis.

(i) Define *principal axis*. [1]

.....
.....

(ii) Construct rays to locate the position of the image. [3]



(iii) Identify the nature of the image. [1]

.....
.....

(Option G continues on the following page)




44EP39

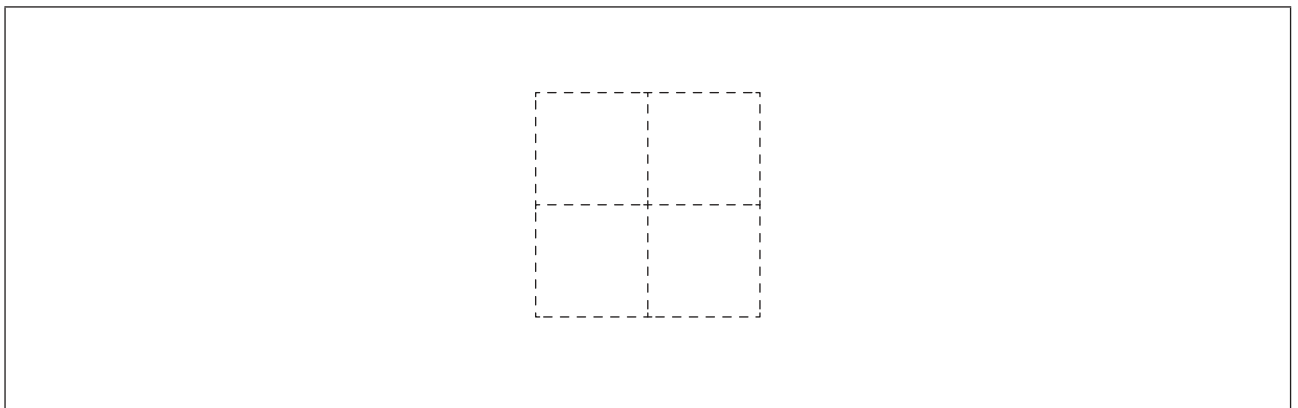
Turn over

(Option G, question 20 continued)

- (b) Another object, as shown, is positioned so that the centre of the object lies on the principal axis of the lens. The object is normal to the principal axis. The lens has not been corrected for spherical aberration.



The diagram shows what would be seen on the screen if the lens produced no aberrations in the image.



- (i) The lens is covered with a wide aperture. Using the diagram, sketch the likely appearance of the image if the lens **produces** spherical aberrations. [2]
- (ii) Outline why reducing the size of the aperture will reduce the effects of spherical aberration. [2]

.....

.....

.....

.....

(Option G continues on the following page)



(Option G continued)

21. This question is about lasers.

(a) Outline, in terms of the production of laser light, what is meant by

(i) monochromatic.

[1]

.....
.....

(ii) population inversion.

[1]

.....
.....

(b) Lasers are widely used in medicine. Outline **one** use of lasers in this field.

[2]

.....
.....
.....
.....

(Option G continues on the following page)



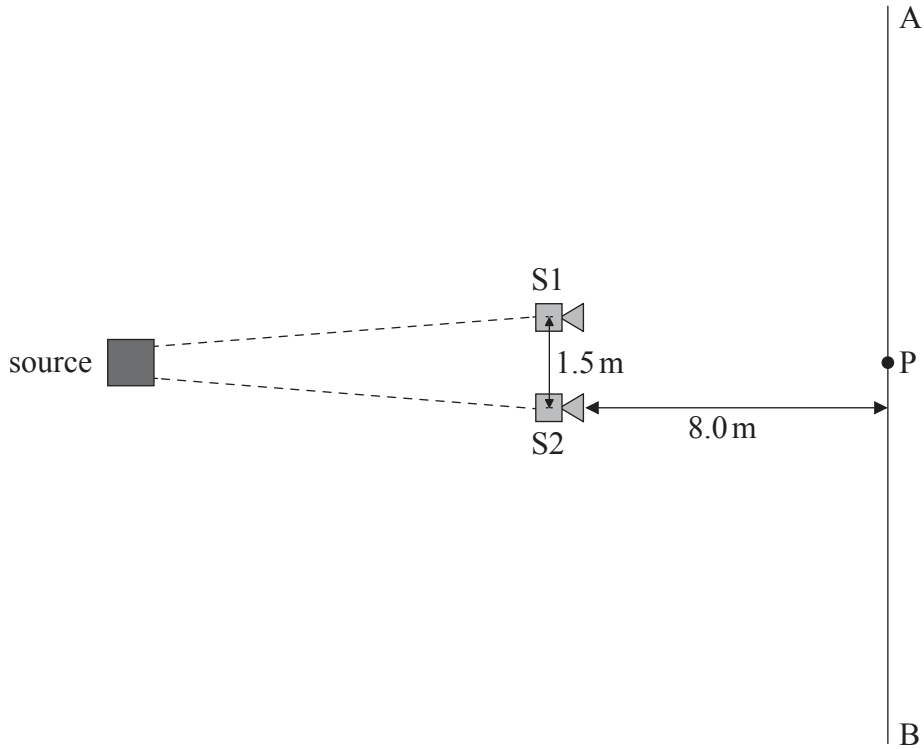
44EP41

Turn over

(Option G continued)

22. This question is about the interference of sound waves.

Two loudspeakers, S1 and S2, each emit a musical note of frequency 2.5 kHz with identical signal amplitude. Point P lies on the line AB and is equidistant from S1 and S2. The speakers are placed 1.5 m apart from each other and 8.0 m from line AB. The speed of sound is 330 m s^{-1} .



A person walking in a straight line from A to B observes that the intensity of sound alternates between high and low.

(a) With reference to interference, explain why the intensity of sound alternates along line AB. [3]

.....

.....

.....

.....

.....

.....

(Option G continues on the following page)



(Option G, question 22 continued)

- (b) The sound has a maximum intensity at P. Calculate the distance along line AB to the next intensity maximum when S1 and S2 emit a musical note of frequency 2.5 kHz. [2]

.....
.....
.....
.....

- (c) S1 and S2 are moved so that they are now 3.0 m apart. They remain at the same distance from line AB. Discuss the changes, if any, in the rate at which the intensity of sound alternates when a person is walking along line AB at half the speed. [2]

.....
.....
.....
.....

End of Option G



44EP43

Please **do not** write on this page.

Answers written on this page
will not be marked.



44EP44